

# Compare Lengths


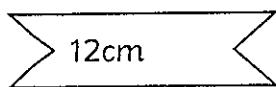
To compare lengths in m, cm and mm.



- 1) Use the comparison symbols to compare the lengths of the ribbons.

$>$  greater than       $<$  less than

a) 24cm  12cm



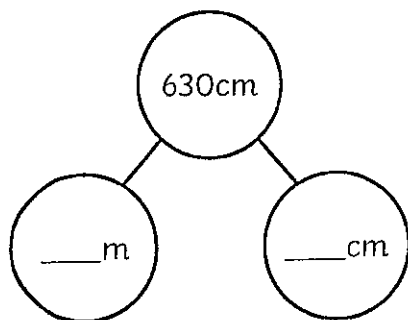
b) 18cm  21cm



- 2) Compare the lengths. Use the part-whole models to help you use the same unit of length.

10mm = 1cm  
100cm = 1m

a) 630cm  5m and 22cm



b) 3cm and 1mm  81mm

