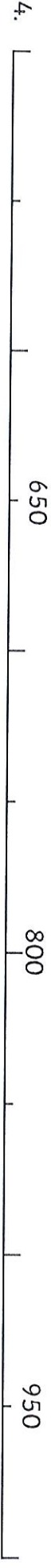
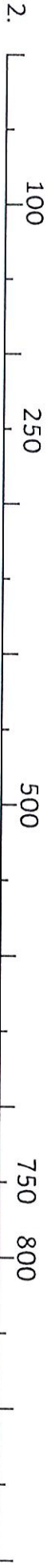


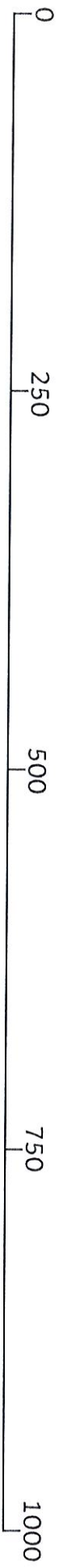
Filling in Missing Numbers on a Number Line

The number lines below are not quite complete. Use your knowledge of the number system and fill in the missing numbers.



5. On the number line below, mark A, B, C, D and E in the estimated position.

A = 200 B = 400 C = 350 D = 900 E = 700



Challenge: Can you create a number line for the numbers between 1000 and 2000?

